






\*Visit the posters around the classroom. There are 3 sales on each poster. Find out the unit price of each sale. Then, decide which sale you will buy. Give the reason. The unit price is not the only thing you consider when you go shopping, but it is important!!!

YOU MAY WANT TO BRING A SCRAP PAPER FOR CALCULATIONS!!!





ITEM	Unit Price # 1	Unit Price # 2	Unit Price # 3	What will you buy? Why?
				
				
				
				

**TURN TO THE BACK OF THE WORKSHEET!!!**  
2 sided



UNIT PRICING WORKSHEET ANSWER KEY

ITEM	Unit Price # 1	Unit Price # 2	Unit Price # 3	What will you buy? Why?
	.69 Cents	.665 Cents	.498 cents	
	\$1.99/LB	\$1.79/LB	\$1.398/LB	
	\$4.79 Lb	\$2.395/LB	\$1.49/LB	
	\$2.495/ LB	\$1.995/ LB	.998 cents/ LB	
	\$2.35/ L	\$1.845/ L	1.298/ L	

	\$4.15/ Dozen	\$5.70/ Dozen	\$6.70/ Dozen	
	\$2.499/ KG	\$1.999/ KG	\$2.285/ KG	
	\$4.67/ L  Or  .00467/ ML	\$4.158/ L  Or  .00416/ ML	\$3.118/ L  Or  .003118/ ML	
	\$12.78/ KG	\$15.41/ KG	\$7.54/KG	